


Section 1

Put in the missing numbers.

31		33		35		37		39
----	--	----	--	----	--	----	--	----

Section 2

How many lollies are there altogether?



Section 3

What's the missing number?

$$20 - \square = 17$$



Section 4

Which snake is the shortest?



Section 5

Two dogs have 8 biscuits altogether. They each had the same amount. How many biscuits did each dog have?



Section 6

Colour half of these shapes.



Section 7

Circle the even numbers.

32

51

37

48

66

Section 8

$$20 + \square = 29$$



$$15 + \square = 21$$



Section 1

Draw 4 more flowers. Fill in the boxes to show how many flowers there are altogether.



$$\square + \square = \square$$

Section 2

Draw and colour the next 5 beads in the pattern.



Section 3

What will it show in 2 days' time? Circle the correct date.



Sunday
June 11th

Monday
June 12th

Tuesday
June 13th

Section 4

You are at the zoo. You look into the giraffe area. You see 12 legs. How many giraffes are in there?

Section 5

How many of each shape are there?



triangular prism = sphere =

cuboid =

Section 6

Colour the jugs to make their labels correct.



full



half full

Section 7

Draw the hands on the clock to show quarter past 11.




Section 8


Draw the coins that I need to buy the toy.




Section 1
 If these bananas come in bunches of 5, and there are 25 bananas altogether, how many bunches would there be?



Section 4
 I lose 5p.
 How much money have I got left?
 Write this as a number sentence.




Section 7
 What time is it? Circle the correct time.




Half past 3 40 minutes past 3 Half past 8

Section 2

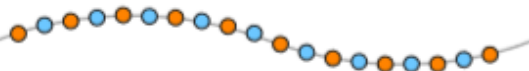


× 2 =


Section 5
 Divide the pizzas into quarters.
 If the slices are shared out equally between 4 people, how many quarters will each person have?



Section 3
 Count the beads and write the number.



Section 6
 Order these numbers correctly.



Section 8
 Write 4 pairs of numbers that make 100.

